



**SOF NATIONAL CYBER OLYMPIAD**

Total Questions : 35

Time : 1 hr.

PATTERN & MARKING SCHEME			
Section	(1) Logical Reasoning	(2) Computers & IT	(3) Achievers Section
No. of Questions	5	25	5
Marks per Ques.	1	1	2

**SYLLABUS**

**Section – 1 :** Patterns, Alphabet Test, Coding-Decoding, Mirror Images, Embedded Figures, Geometrical Shapes and Solids, Ranking Test, Direction Sense Test, Days and Dates & Possible Combinations, Analogy and Classification.

**Section – 2 :** About Computers (General Information), Evolution of Computers, Parts of Computer, Input and Output Devices, Hardware, Software, MS-Word(Formatting a Word document, Font group, Format Painter, Search using Find and Replace option, Checking Spelling and Grammar using Thesaurus), Using Windows 7, Introduction to Internet and Its Uses, Computer Networks, MS-Paint, Latest Developments in the field of IT.





**Section – 3 :** Higher Order Thinking Questions - Syllabus as per Section – 2.





**Questions are based on Windows 7 and MS-Office 2010.**

**LOGICAL REASONING**

- What is the next number in the pattern below?  
125, 150, 175, 200, ...?....  
(A) 205                      (B) 215                      (C) 225                      (D) 250
- Choose the correct mirror image of the word, if the mirror is placed vertically to the left.  
FIXING  
(A) GNIXIF                      (B) ƆNIXIF                      (C) ƆNIXIF                      (D) GNIXIF
- In a certain code, 3456 is coded as ROPE, 15526 is coded as APPLE, then how is 54613 coded?  
(A) RPPEO                      (B) ROPEA                      (C) POEAR                      (D) PAREO

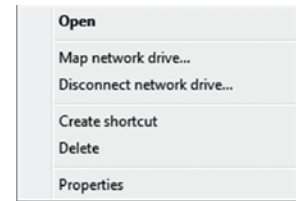
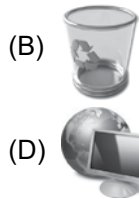

**COMPUTERS AND INFORMATION TECHNOLOGY**

- Internet can be used for \_\_\_\_\_.  
(A) Checking exam results                      (B) Chatting  
(C) E-mailing                      (D) All of these
- When your desktop is cluttered with open windows, you can use \_\_\_\_\_ to select a single window and minimize the rest.  
(A) Aero Peek                      (B) Aero Shake                      (C) Aero Steer                      (D) Aero Flip
- Windows 7 is what type of software?  
(A) Utility Software                      (B) Application Software  
(C) System Software                      (D) Language Processor
- This key is used to move cursor to the beginning of the line or the screen depending on the software used. Identify the key.  
(A)                       (B)                       (C)                       (D) 
- 1024 bytes equals \_\_\_\_\_.  
(A) 1 Kilobyte (KB)                      (B) 1 Megabyte (MB)                      (C) 1 Gigabyte (GB)                      (D) 1 Character
- Who among the following is known as father of computers?  
(A) Charles Babbage                      (B) John Napier                      (C) Blaise Pascal                      (D) Herman Hollerith

10. While working with MS-Paint which option is used to add name to your drawing?  
 (A) Text tool (B) Pencil tool (C) Air brush tool (D) Erase tool
- 
11. Which of the following is a correct internet address?  
 (A) ww.yahoo.com (B) www.cartoonnetwork.co  
 (C) www.hotmail.com (D) www.indiatime.comm
- 
12. In MS-Word 2010, which colour wavy line under a word indicates a spelling or grammar mistake?  
 (A) Red (B) Green (C) Yellow (D) Both (A) and (B)
- 
13. Internet is used for audio and video calling across geographies. A popular tool for such internet calls is \_\_\_\_\_.  
 (A)  (B)  (C)  (D) 

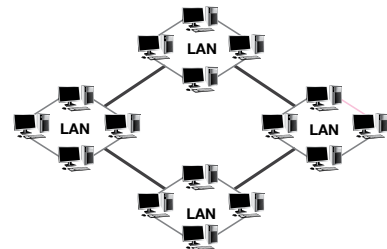
### ACHIEVERS SECTION

14. A pop-up menu is displayed when we do right click on a desktop icon. Which of the following options holds the pop-up menu depicted in the given image in Windows 7?



15. Which of the following types of network is used to connect the LANs shown in the given image?

- (A) CAN  
 (B) PAN  
 (C) WAN  
 (D) SAN



-----

SPACE FOR ROUGH WORK

### ANSWERS

NCO – 1. (C) 2. (B) 3. (C) 4. (D) 5. (B) 6. (C) 7. (B) 8. (A) 9. (A) 10. (A) 11. (C) 12. (D) 13. (A) 14. (D) 15. (C)